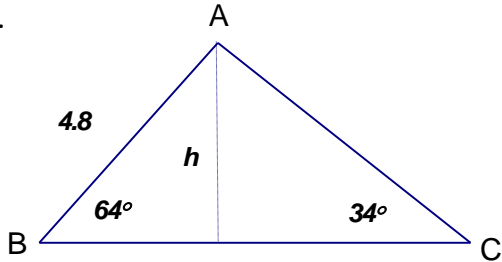


Cumulative Review 8

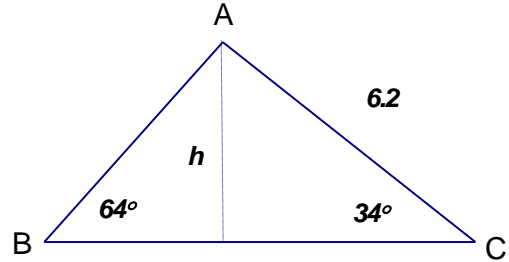
Name _____ Date _____ Period _____

Find the height of each triangle given, using $\sin \theta = \frac{\text{opp}}{\text{hyp}}$. Round answers to the nearest tenth. Show all work.

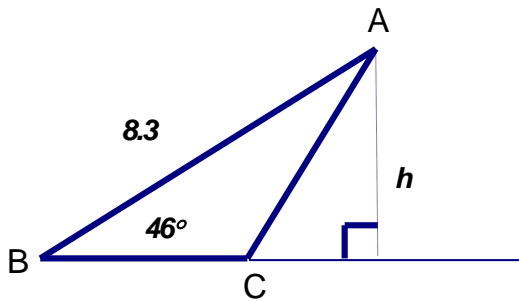
1.



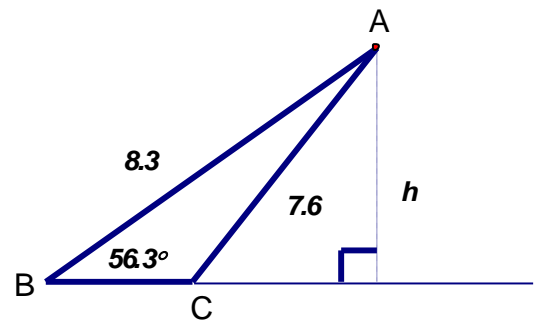
2.



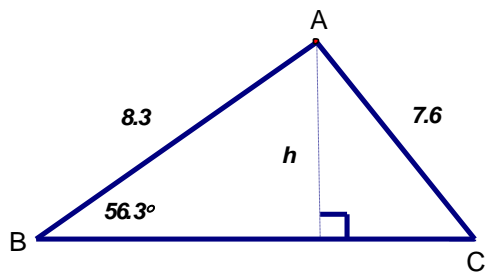
3.



4.



5.



6. What do you notice about the triangles in problems 5 & 6? Explain why this can happen if you can.